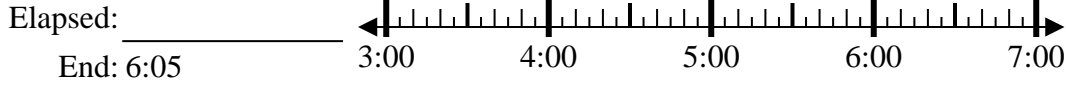




Solve each problem.

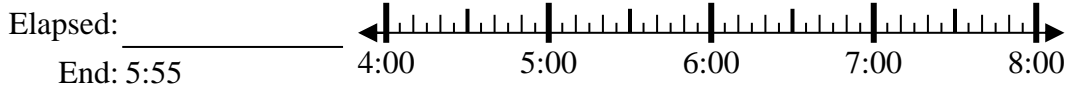
1) Start: 3:35



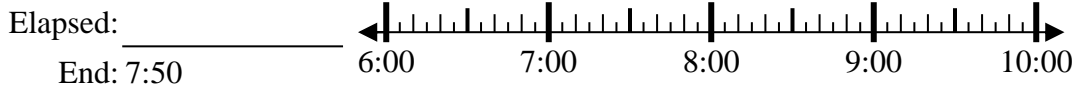
2) Start: 2:40



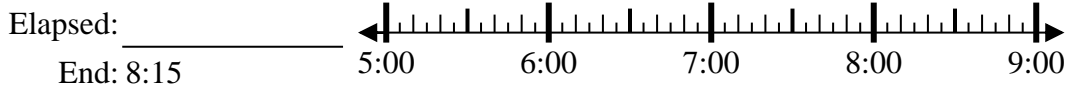
3) Start: 4:35



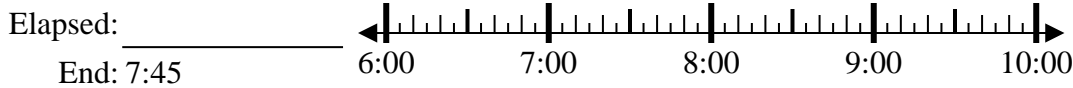
4) Start: 6:25



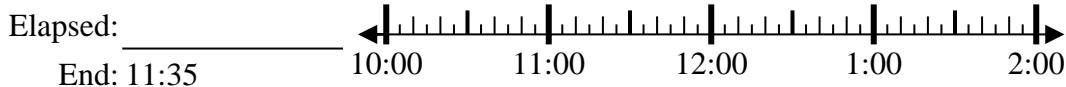
5) Start: 5:50



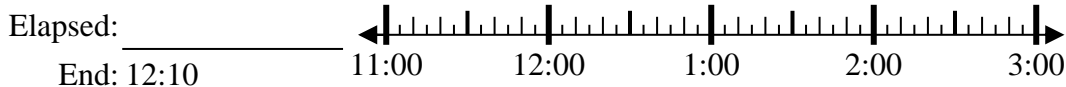
6) Start: 6:20



7) Start: 10:25



8) Start: 11:00



Answers

1. _____
2. _____
3. _____
4. _____
5. _____
6. _____
7. _____
8. _____



Solve each problem.

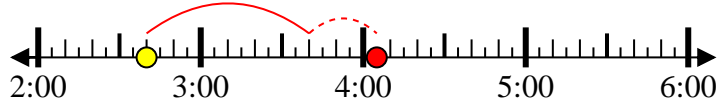
1) Start: 3:35

Elapsed: 2 hrs & 30 mins
End: 6:05



2) Start: 2:40

Elapsed: 1 hr & 25 mins
End: 4:05



3) Start: 4:35

Elapsed: 1 hr & 20 mins
End: 5:55



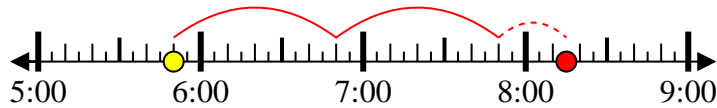
4) Start: 6:25

Elapsed: 1 hr & 25 mins
End: 7:50



5) Start: 5:50

Elapsed: 2 hrs & 25 mins
End: 8:15



6) Start: 6:20

Elapsed: 1 hr & 25 mins
End: 7:45



7) Start: 10:25

Elapsed: 1 hr & 10 mins
End: 11:35



8) Start: 11:00

Elapsed: 1 hr & 10 mins
End: 12:10



Answers

1. 2 hrs & 30 mins

2. 1 hr & 25 mins

3. 1 hr & 20 mins

4. 1 hr & 25 mins

5. 2 hrs & 25 mins

6. 1 hr & 25 mins

7. 1 hr & 10 mins

8. 1 hr & 10 mins